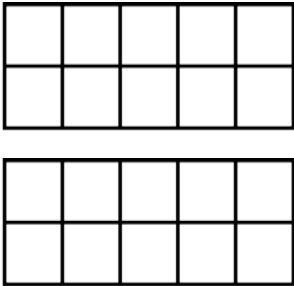
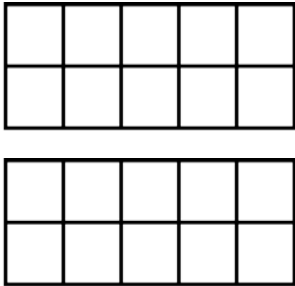
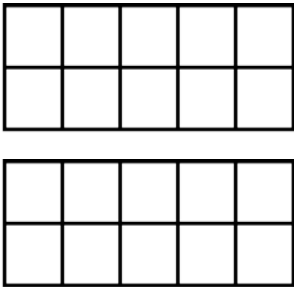
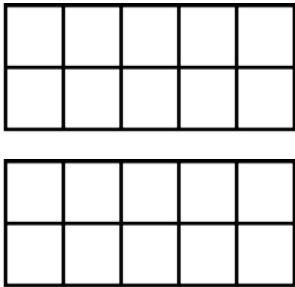
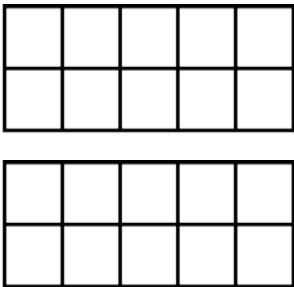
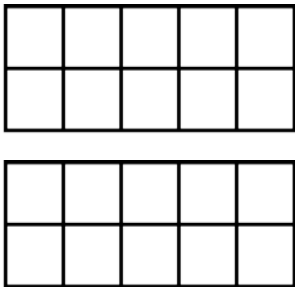


Comparing Numbers to 20

First Number	Draw It	Second Number	Draw It
			
<p>_____ is _____ than _____</p> <p>(bigger or smaller)</p>			


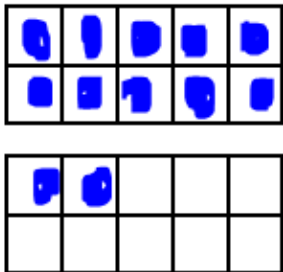
First Number	Draw It	Second Number	Draw It
			
<p>_____ is _____ than _____</p> <p>(bigger or smaller)</p>			

First Number	Draw It	Second Number	Draw It
			
<p>_____ is _____ than _____</p> <p>(bigger or smaller)</p>			

First Number	Draw It	Second Number	Draw It																																								
	<table border="1"> <tr><td></td><td></td><td></td><td></td><td></td></tr> <tr><td></td><td></td><td></td><td></td><td></td></tr> </table> <table border="1"> <tr><td></td><td></td><td></td><td></td><td></td></tr> <tr><td></td><td></td><td></td><td></td><td></td></tr> </table>																						<table border="1"> <tr><td></td><td></td><td></td><td></td><td></td></tr> <tr><td></td><td></td><td></td><td></td><td></td></tr> </table> <table border="1"> <tr><td></td><td></td><td></td><td></td><td></td></tr> <tr><td></td><td></td><td></td><td></td><td></td></tr> </table>																				
<p>_____ is _____ than _____</p> <p>(bigger or smaller)</p>																																											

First Number	Draw It	Second Number	Draw It																																								
	<table border="1"> <tr><td></td><td></td><td></td><td></td><td></td></tr> <tr><td></td><td></td><td></td><td></td><td></td></tr> </table> <table border="1"> <tr><td></td><td></td><td></td><td></td><td></td></tr> <tr><td></td><td></td><td></td><td></td><td></td></tr> </table>																						<table border="1"> <tr><td></td><td></td><td></td><td></td><td></td></tr> <tr><td></td><td></td><td></td><td></td><td></td></tr> </table> <table border="1"> <tr><td></td><td></td><td></td><td></td><td></td></tr> <tr><td></td><td></td><td></td><td></td><td></td></tr> </table>																				
<p>_____ is _____ than _____</p> <p>(bigger or smaller)</p>																																											

First Number	Draw It	Second Number	Draw It																																								
	<table border="1"> <tr><td></td><td></td><td></td><td></td><td></td></tr> <tr><td></td><td></td><td></td><td></td><td></td></tr> </table> <table border="1"> <tr><td></td><td></td><td></td><td></td><td></td></tr> <tr><td></td><td></td><td></td><td></td><td></td></tr> </table>																						<table border="1"> <tr><td></td><td></td><td></td><td></td><td></td></tr> <tr><td></td><td></td><td></td><td></td><td></td></tr> </table> <table border="1"> <tr><td></td><td></td><td></td><td></td><td></td></tr> <tr><td></td><td></td><td></td><td></td><td></td></tr> </table>																				
<p>_____ is _____ than _____</p> <p>(bigger or smaller)</p>																																											

First Number	Draw It	Second Number	Draw It
18		12	
<p> <u>18</u> is <u>bigger</u> than <u>12</u> (bigger or smaller) </p>			